



1. RODEA EL MÁS PEQUEÑO.

1	3
---	---

8	7
---	---

2	5
---	---

4	9
---	---

4	2
---	---

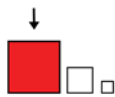
2	7
---	---

0	1
---	---

3	2
---	---

3	4
---	---

5	6
---	---



2. RODEA EL MÁS GRANDE.

3	6
---	---

5	4
---	---

9	7
---	---

3	9
---	---

6	8
---	---

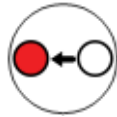
1	4
---	---

3	6
---	---

7	8
---	---

2	6
---	---

2	5
---	---



3. ESCRIBE EL NÚMERO QUE VA ANTES.

	2
--	---

	8
--	---

	7
--	---

	4
--	---

	5
--	---

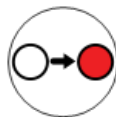
	9
--	---

	3
--	---

	10
--	----

	1
--	---

	2
--	---



4. ESCRIBE EL NÚMERO QUE VA DESPUÉS.

1	
---	--

7	
---	--

6	
---	--

4	
---	--

9	
---	--

8	
---	--

2	
---	--

3	
---	--

0	
---	--

5	
---	--



5. ESCRIBE EL NÚMERO QUE FALTA.

0		2
---	--	---

4		6
---	--	---

2		4
---	--	---

1		3
---	--	---

5		7
---	--	---

3		5
---	--	---

7		9
---	--	---

8		10
---	--	----

6		8
---	--	---

2		4
---	--	---



\neq $=$

2		5
---	--	---

7		2
---	--	---

3		6
---	--	---

8		1
---	--	---

4		2
---	--	---



1
2
3
4
5
6
7
8
9
10

SIETE
UNO
CINCO
DOS
SEIS
OCHO
NUEVE
TRES
CUATRO
DIEZ



1
2
3
4
5
6
7
8
9
10

.....

.....

.....

.....

.....

.....

.....

.....

.....

.....