



RODEA EL NÚMERO MÁS PEQUEÑO

72	73
----	----

76	74
----	----

71	75
----	----

78	79
----	----

80	78
----	----

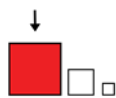
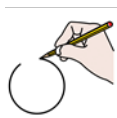
73	72
----	----

74	77
----	----

71	78
----	----

70	80
----	----

74	76
----	----



RODEO EL NÚMERO MÁS GRANDE.

71	75
----	----

80	75
----	----

74	78
----	----

75	79
----	----

79	80
----	----

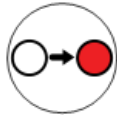
73	72
----	----

72	73
----	----

76	77
----	----

70	80
----	----

78	71
----	----



ESCRIBE EL NÚMERO DE ANTES.

	75
--	----

	72
--	----

	77
--	----

	74
--	----

	80
--	----

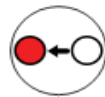
	79
--	----

	71
--	----

	76
--	----

	78
--	----

	73
--	----



ESCRIBE EL NÚMERO QUE VA DESPUÉS.

78	
----	--

73	
----	--

74	
----	--

71	
----	--

70	
----	--

76	
----	--

75	
----	--

72	
----	--

79	
----	--

77	
----	--



ESCRIBE EL NÚMERO QUE FALTA.

75		77
----	--	----

73		75
----	--	----

78		80
----	--	----

72		74
----	--	----

71		73
----	--	----

76		78
----	--	----

77		79
----	--	----

74		76
----	--	----

70		72
----	--	----

79		81
----	--	----



$\neq$      $=$

80		75
----	--	----

74		73
----	--	----

77		77
----	--	----

78		71
----	--	----

72		75
----	--	----



70
71
72
73
74
75
76
77
78
79
80

SETENTA Y SIETE
SETENTA Y CINCO
SETENTA Y OCHO
SETENTA Y UNO
SETENTA Y SEIS
SETENTA Y DOS
SETENTA Y NUEVE
OCHENTA
SETENTA Y CUATRO
SETENTA
SETENTA Y TRES



70

.....

71

.....

72

.....

73

.....

74

.....

75

.....

76

.....

77

.....

78

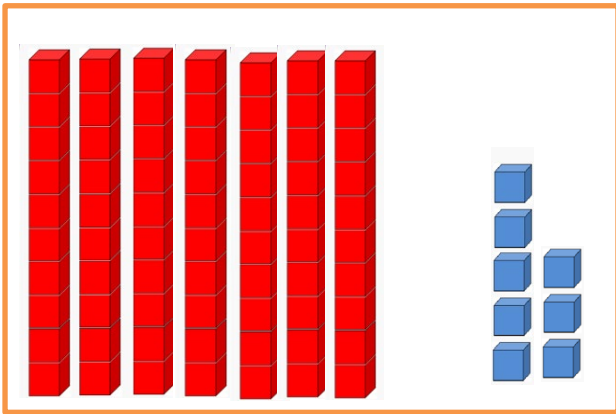
.....

79


.....

80

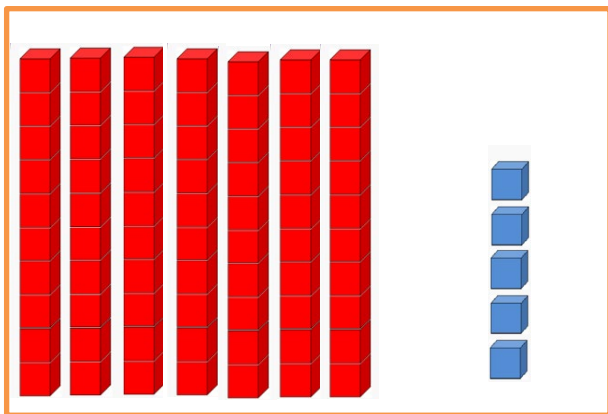
.....



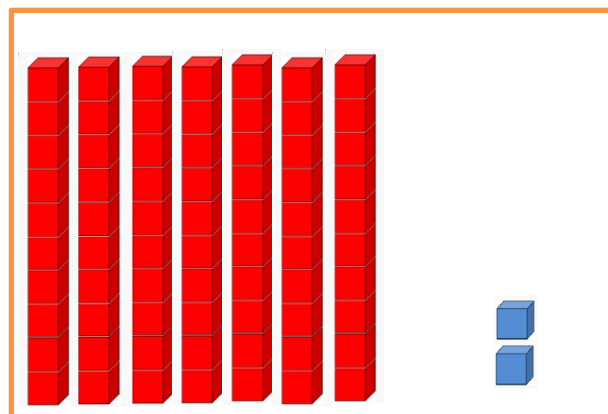
D	U




D	U




D	U



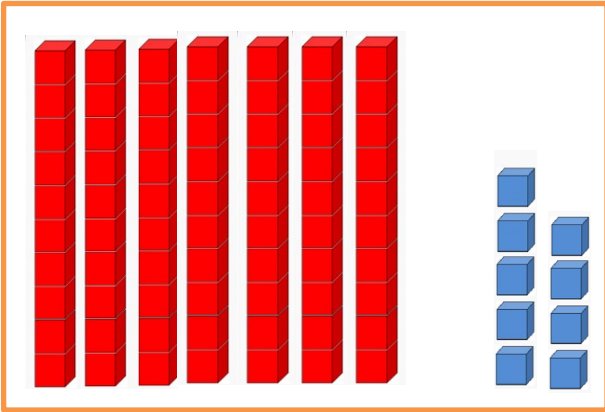
D	U




D	U



D	U



D	U



D	U