



RODEA EL NÚMERO MÁS PEQUEÑO.

93	91
----	----

97	92
----	----

98	94
----	----

93	91
----	----

95	97
----	----

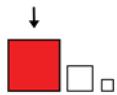
100	99
-----	----

92	96
----	----

94	90
----	----

90	100
----	-----

96	93
----	----



RODEA EL NÚMERO MÁS GRANDE.

95	91
----	----

92	98
----	----

90	97
----	----

93	96
----	----

94	98
----	----

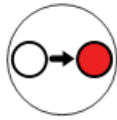
94	99
----	----

96	95
----	----

90	91
----	----

100	99
-----	----

98	95
----	----



ESCRIBE EL NÚMERO QUE VA ANTES.

	91
--	----

	92
--	----

	96
--	----

	100
--	-----

	90
--	----

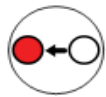
	93
--	----

	94
--	----

	95
--	----

	97
--	----

	98
--	----



ESCRIBE EL NÚMERO QUE VA DESPÚES.

97	
----	--

90	
----	--

93	
----	--

96	
----	--

99	
----	--

92	
----	--

91	
----	--

100	
-----	--

95	
----	--

94	
----	--



ESCRIBE EL NÚMERO QUE FALTA.

91		93
----	--	----

99		101
----	--	-----

96		98
----	--	----

92		94
----	--	----

94		96
----	--	----

95		97
----	--	----

93		95
----	--	----

98		100
----	--	-----

90		92
----	--	----

97		98
----	--	----



93		97
----	--	----

91		93
----	--	----

99		99
----	--	----

97		95
----	--	----

94		92
----	--	----



90
91
92
93
94
95
96
97
98
99
100

NOVENTA Y SIETE
NOVENTA Y CINCO
NOVENTA Y NUEVE
NOVENTA Y UNO
NOVENTA Y OCHO
NOVENTA
CIEN
NOVENTA Y DOS
NOVENTA Y TRES
NOVENTA Y SEIS
NOVENTA Y CUATRO



90
91
92
93
94
95
96
97
98
99
100

.....

.....

.....

.....

.....

.....


.....

.....


.....

.....


.....




D	U




D	U




D	U




D	U




D	U



D	U



D	U



D	U